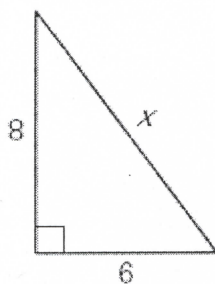


TARGET 7A

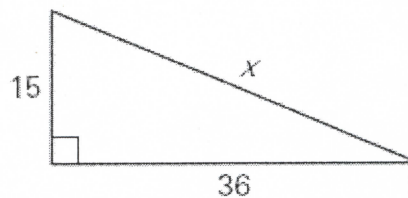
Name _____ Date _____

Find the length of the hypotenuse of the right triangle.

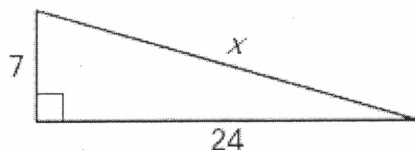
1.



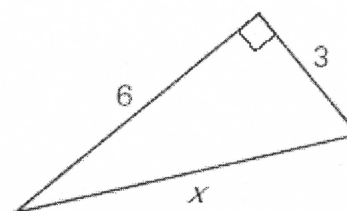
2.



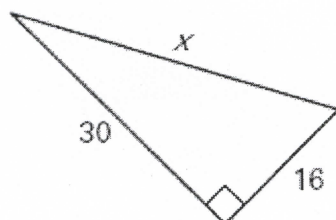
3.



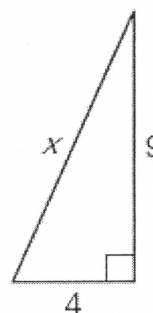
4.



5.

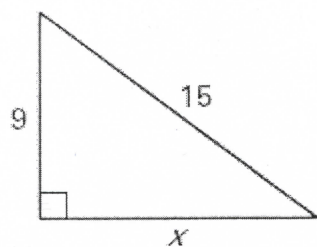


6.

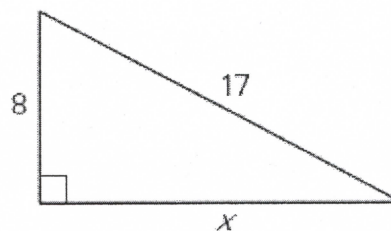


Find the unknown leg length x .

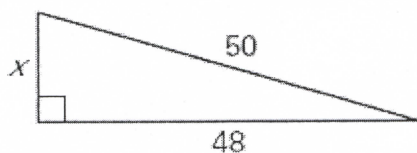
7.



8.



9.



Chapter 7 target sheets

TARGET A ANSWERS

1. 10
2. 39
3. 25
4. 6.71
5. 34
6. 9.85
7. 12
8. 15
9. 14